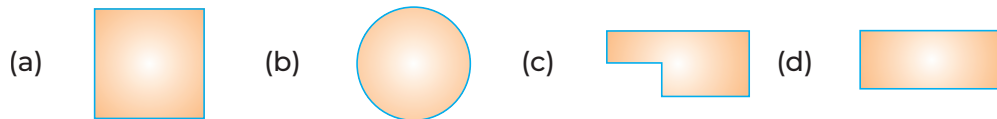
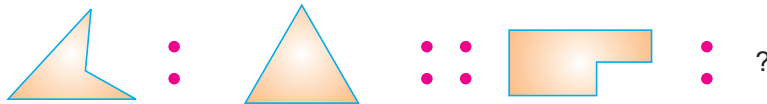


# Chapter 01


## Matching Pairs

**Directions** (Q. Nos. 1-3) Identify the relation between elements of first pair and choose the option that will replace?

1.



2.

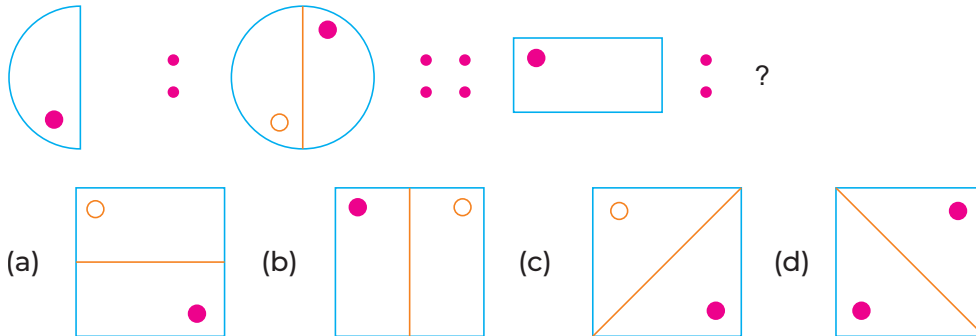


PAINTER

PILOT



3. Which pattern on the right completes the second pair in the same way as the first?



4. The letters are linked in some way. Identify the relation and complete the last box.



- (a) JJJ      (b) KKK      (c) QQQ      (d) PPP

5. As, MNO is related to QRS, then BCD is related to?


- (a) EFG      (b) FGH  
(c) IJK      (d) EGH

6. Identify the relation between the letters and complete the second pair?



- (a) LM      (b) KL      (c) KM      (d) MO

7. Identify the relation and complete the last box.



- (a) 12      (b) 8      (c) 2      (d) 18

8. As 345 is related to 567, then 546 is related to?

- (a) 964      (b) 876      (c) 678      (d) 768

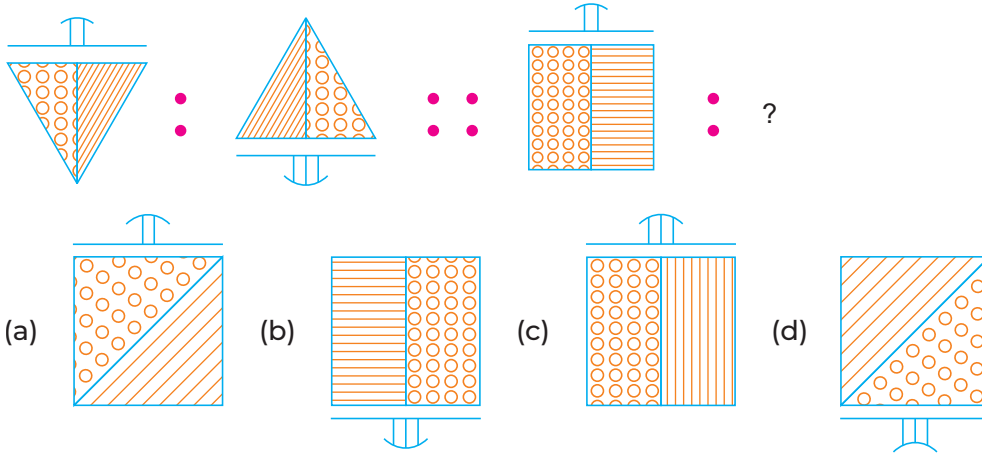
9. As Gardener is related to flowers, then Doctor is related to?

- (a) Nurse      (b) Patient      (c) Tablets      (d) Injection

10. Litchi is to fruit as cucumber is to?

- (a) Fruit            (b) Vegetable      (c) Flower            (d) Seed

11. Which option will replace ?




12. As, MASK is related to PDVN, then COVID is related to?

- (a) FRYGL            (b) FLGRY            (c) FRYLG            (d) FYLGR

13. As 70805040 is related to 40502010, how 30508090 is related to?

- (a) 00025060      (b) 00002560      (c) 25006000      (d) 00205060

14. The letters and numbers are linked in some way. Identify the relation and complete the last box?



- (a) XI9            (b) 23J10            (c) 23I9            (d) X9I

15. As 4-6-8-10 is related to B-F-H-J, then 11-16-18-22?

- (a) K-T-W-P      (b) K-P-R-V      (c) K-Q-S-U      (d) P-R-V-K

### Answers

1. (d)	2. (c)	3. (a)	4. (b)	5. (b)	6. (c)	7. (b)	8. (d)	9. (b)	10. (b)
11. (b)	12. (c)	13. (d)	14. (c)	15. (b)					