




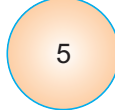

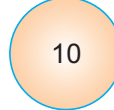






# Chapter 01





## Matching Pair





**Directions** (Q. Nos. 1-10) There is a certain relationship between the pair of figures given on either side of ::. Identify the relationship of given pair and find the missing term.





1.  ::  ::  :: 

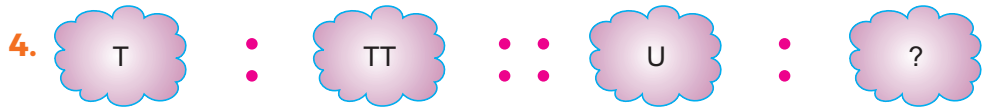
(a)  (b)  (c)  (d) 

2.  ::  ::  :: 

(a)  (b)  (c)  (d) 

3.  ::  ::  :: 

(a)  (b)  (c)  (d) 



- (a) T                      (b) U                      (c) UU                      (d) Z




- (a) Green                      (b) Red                      (c) White                      (d) Orange

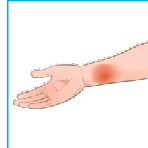

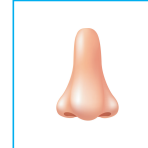




- (a) Feel                      (b) Taste                      (c) Walk                      (d) Hear

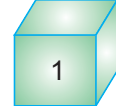
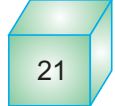
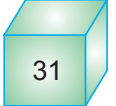
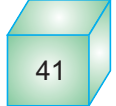






- (a)                       (b)                       (c)                       (d) 







- (a)                       (b)                       (c)                       (d) 











- (a)                       (b)                       (c)                       (d) 


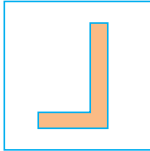


10.  ::  ::  :: 




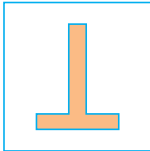
(a)  (b)  (c)  (d) 





**Directions** (Q. Nos. 11-15) Which option will replace the question mark ?

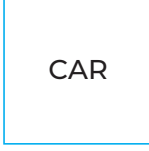
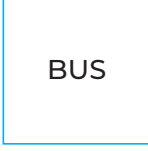


11.  ::  ::  :: 

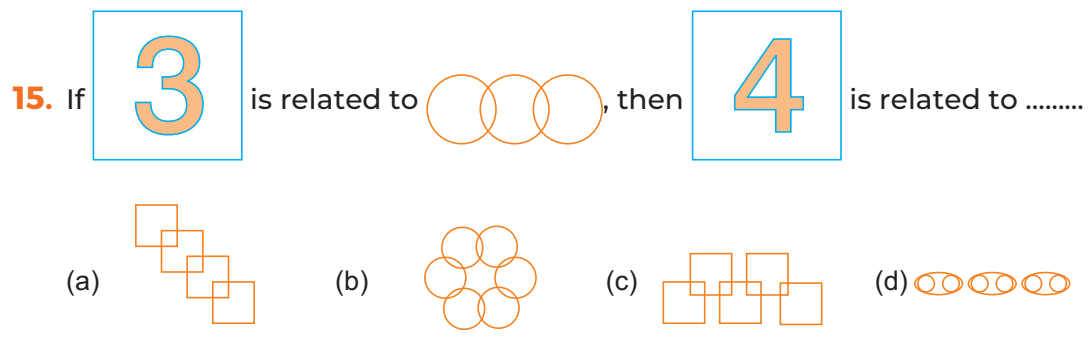
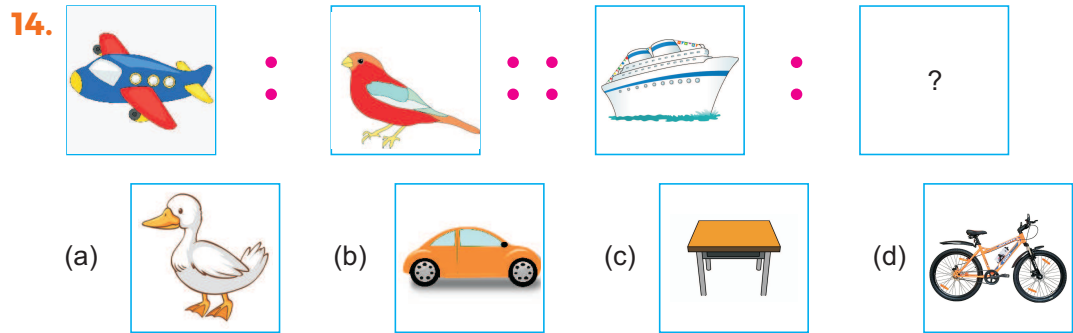
(a)  (b)  (c)  (d) 

12.  ::  ::  :: 

(a)  (b)  (c)  (d) 

13.  ::  ::  :: 

(a)  (b)  (c)  (d) 



**Answers**

---

1. (a)	2. (d)	3. (d)	4. (c)	5. (a)	6. (d)	7. (c)	8. (d)	9. (c)	10. (a)
11. (d)	12. (c)	13. (a)	14. (a)	15. (a)					

---