

Chapter 01

Analogy

1 Mark Questions

1. Which set of letters completes the second pair in the same way as the first pair ?
NMJT : PKLR : DOXV : ?
(a) FQTT (b) BMZT (c) FMZT (d) JFZT
2. Which set of letters completes the second pair in the same way as the first pair ?
OFPN : MKUL :: CNTG : ?
(a) GTXO (b) TGMX (c) TXOG (d) COTX
3. Which set of letters complete the second pair in the same way as the first pair?
DREAMLAND : AERDMDNAL :: COMPLETED : ?
(a) PMOCLEEDT (b) PCOMLETED
(c) PMCOLTEED (d) PMOCLDETE
4. Choose the word that completes the second pair in the same way as the first pair.
Itanagar : Arunachal Pradesh :: Imphal : ?
(a) Mizoram (b) Meghalaya
(c) Manipur (d) Jharkhand
5. Choose the word that completes the second pair in the same way as the first pair.
Asleep : Awake :: Amuse : ?
(a) human (b) alive (c) asleep (d) Bore

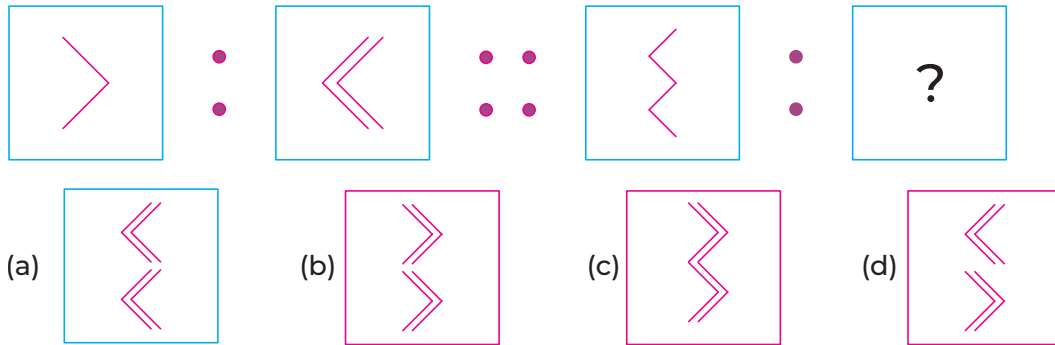
6. Choose the number that completes the second pair in the same way as the first pair.
 $735 : 917 :: 894 : ?$
 (a) 107 (b) 1076 (c) 176 (d) 1760
7. Which number completes the second pair in the same way as the first pair?
 $0.93 : 0.72 :: 3.96 : ?$
 (a) 3.20 (b) 2.97 (c) 1.67 (d) 2.69
8. Identify the second pair in the same way as the first pair.
 $932 : 276 :: ?$
 (a) 698 : 4896 (b) 758 : 3540
 (c) 981 : 6767 (d) 896 : 6272
9. Identify the second pair in the same way as the first pair.
 KARTIK : 36
 (a) BLANKET : 64 (b) CONSTRUCT : 100
 (c) TRIANGLE : 64 (d) INDIA : 36
10. Identify the second pair in the same way as the first pair.
 Shri Arvind Kejriwal : Delhi
 (a) Goa : Bhupesh Baghel (b) Gujarat : Manohar Lal
 (c) Kerala : Pinarayi vijayan (d) Sikkim : Ashok Gehlot

2 Marks Questions

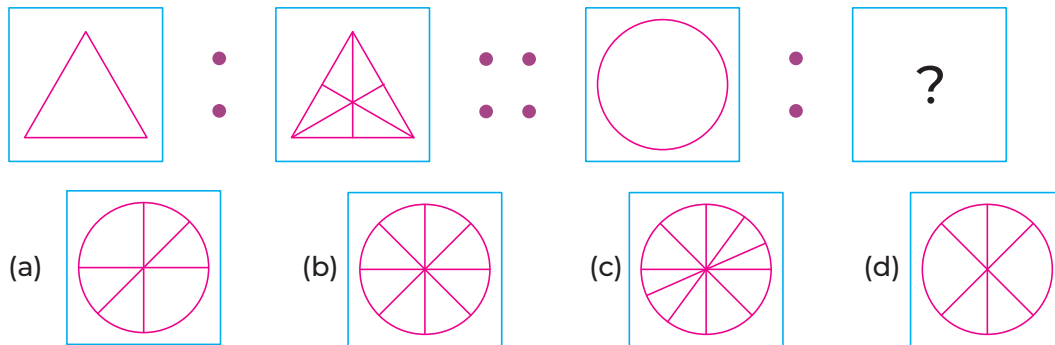
Directions (Q. Nos. 11 and 12) Choose the set of term which is similar to the given set.

11. TENDON : HWNXMN
 (a) DECOR : WVTPK (b) ALMARI : AOPRSA
 (c) CREATE : WRRSUT (d) MOBILE : OMZSPW
12. RANDOM : 30
 (a) DOORLY : 48 (b) ITENTOK : 56
 (c) BLANK : 30 (d) ROAST : 20

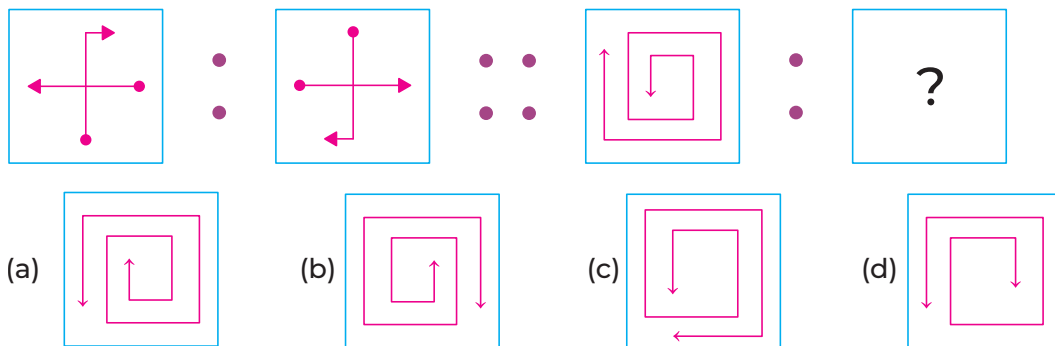
13. Which option figure completes the second pair in the same way as the first pair?



14. Select the related figure from the given options.



15. Select the related figure from the given options.



ANSWERS

1. (c)	2. (b)	3. (d)	4. (c)	5. (d)	6. (b)	7. (b)	8. (b)	9. (c)	10. (c)
11. (d)	12. (d)	13. (c)	14. (d)	15. (b)					
