

# Chapter 01

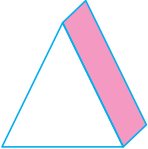


## Matching Pairs





**Direction** (Q. No. 1) Identify the relation between the given pair on either side of :: and find missing figure.

1. **B** : **U** :: **T** : ?

(a) **R**                      (b) **S**                      (c) **M**                      (d) **P**




**Direction** (Q. No. 2) Which pattern below completes the second pair in the same way as first pair?

2.  :  :: ? : 

(a)                       (b)                       (c)                       (d) 

3. As 'M' is related to Mouse, in the same way 'S' is related to?

- (a) Share                      (b) Cash                      (c) Kites                      (d) Mocks

4. As  is related to , in the same way  is related to?

- (a)  (b)  (c)  (d) 








5. As 'Orange' is related to 'Colour', in the same way 'Sugarcane' is related to?

- (a) Month (b) Week (c) Crop (d) Weapon

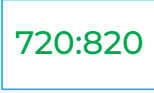
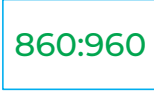
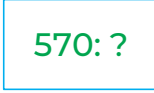
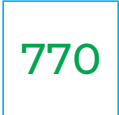

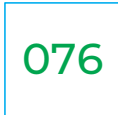
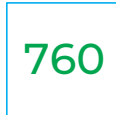
6. As 'CAT' is related to 'ECV', how MAT is related to?

- (a) FCV (b) NVC (c) OCV (d) MVC

7. The letters are linked in same way, identify the relation and complete the last box?

		
(a) 	(b) 	(c) 
		(d) 

8. The numbers are linked in some way, identify the relation and complete the last box?

		
(a) 	(b) 	(c) 
		(d) 

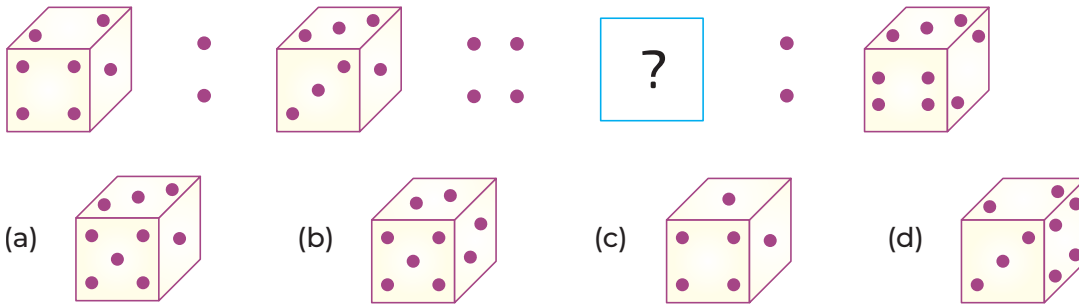
9. As '463' is related to '685', in the same way '164' is related to?

- (a)  (b)  (c)  (d) 

10. As '125' is related to '100', in the same way '400' is related to?

- (a) 375      (b) 275      (c) 575      (d) 500

11. There is a certain relationship between the pair of figures given on either side :: Identify the relationship of given pair and find the missing term.



12. The letters are linked in some way. Identify the relation and complete the last box.

- MNO:NML      GHI:TSR      WXY : ?
- (a) BCD      (b) DCB      (c) FGH      (d) JKL

13. As AZYB is related to 1872, then in the same way QJRI is related to?

- (a) 1781      (b) 1872      (c) 8199      (d) 1998

14. As 'MAGICAL' is related to 'PDJLFDO', in the same way 'CUBICAL' is related to?

- (a) FXELFDO      (b) DVCJDBM      (c) XEFFDOL      (d) EWDKECN

15. As 'P111Q222R' is related to 'S333T444U', in the same way G555H666I is related to?

- (a) J666K333L      (b) M777N888O      (c) O666K777P      (d) J777K888L

### Answers

---

1. (c)	2. (b)	3. (a)	4. (b)	5. (c)	6. (c)	7. (d)	8. (b)	9. (b)	10. (a)
11. (b)	12. (b)	13. (c)	14. (a)	15. (d)					

---