



## Chapter 01

# Living and Non-living Things

1. Which of the following is non-living things?



2. Find the odd one out.




3. Teacher asked the student to complete the given sentence.

All ..... things can .....

Which student made the correct attempt?

- (a) Anuj – natural, reproduce
- (b) Akhil – living, feel
- (c) Yash – man-made, walk its own
- (d) Atul – non-living, breath

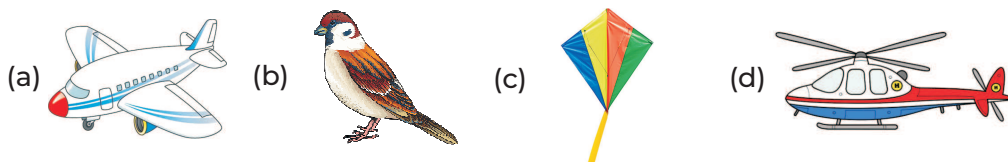
4. Which of the following shows growth in the size?






5. Select the INCORRECT pair.

- (a) Soil-Plant (b) Book-Paper (c) Cycle-Fish (d) Bird-Mountain

6. Which of the following can fly on its own?





7. Match the following columns.

| Column I   | Column II                    |
|--|------------------------------|
| A.  | 1. Man-made non-living thing |
| B.  | 2. Living thing              |
| C.  | 3. Natural non-living thing  |

Codes













- A B C  
(a) 1 2 3  
(c) 2 3 1

- A B C  
(b) 3 1 2  
(d) 1 3 2


8. Choose  for true and  for false statement.

- A. Non-living things can move on their own.
- B. Wood is a natural non-living thing.
- C. Living things can reproduce.

Codes

- |     |   |   |   |     |   |  |   |
|-----|---|---|---|-----|---|--|---|
|     | A   | B   | C   |     | A   | B  | C   |
| (a) |  |  |  | (b) |  |  |  |
| (c) |  |  |  | (d) |  |  |  |

9. Given pictures shows that



- (a) living things can move
- (b) living things can reproduce
- (c) living things can breathe
- (d) living things can eat

10. Guess me.

I am a living thing.

Tree is my house.

I can fly. Who am I?

- |               |          |
|---------------|----------|
| (a) Aeroplane | (b) Leaf |
| (c) Nest      | (d) Bird |

11. Read the conversations between two friends.



Jaya

Wood is made up of tree so, it is a living thing.

Car is made by man, so it is a man-made non-living thing.





Sushma


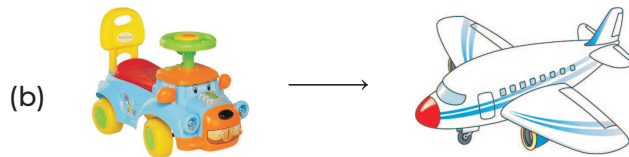
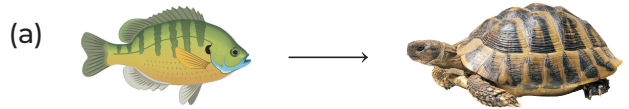
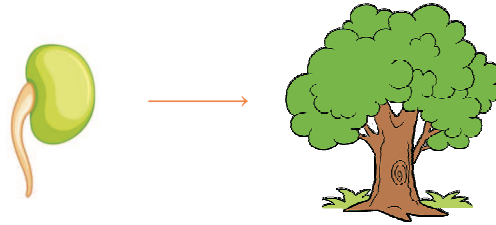
Whose statement is incorrect?

- (a) Jaya only
- (b) Sushma only
- (c) Jaya and Sushma both
- (d) Neither Jaya nor Sushma

12. Select the option that can be placed in same group where 'X' can be placed?



13. Select the option which matches the given figure below?



14. Which of these groups consists only living things?

(a) Car, Bus, Bird

(b) Bird, Lion, Plant

(c) Plant, Seed, Wood

(d) Aeroplane, Kite, Car

15. Which labelled part is non-living thing in the given figure below?



- (a) Only I
- (c) Only III

- (b) II and III
- (d) I and IV

### Answers

- 
- |         |         |         |         |         |        |        |        |        |         |
|---------|---------|---------|---------|---------|--------|--------|--------|--------|---------|
| 1. (a)  | 2. (c)  | 3. (b)  | 4. (d)  | 5. (b)  | 6. (b) | 7. (b) | 8. (b) | 9. (b) | 10. (d) |
| 11. (a) | 12. (c) | 13. (c) | 14. (b) | 15. (c) |        |        |        |        |         |
-