

Chapter 01

Numbers (1-100)

1. Which of the following circle contains 8 stars?



2. Seven numbers are written on the seven balls as follows:



Which ball shows the number lying between 64 and 71?




3. Which of the following numbers is not on the blackboard?

16	32	46
47		59
17	79	92

- (a) Sixteen (b) Fortyseven
(c) Fortynine (d) Ninetytwo

4. What number comes in between in the given figure?



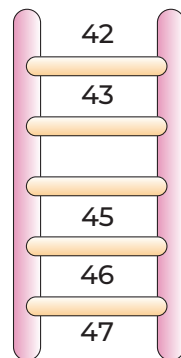
(a) 15

(b) 12

(c) 13

(d) 17

5. Find the missing number in the given figure?



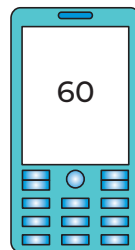
(a) 44

(b) 48

(c) 24

(d) 40

6. What number comes just before



?

(a) 61

(b) 58

(c) 62

(d) 59

7. What number comes just after



- (a) 38 (b) 32 (c) 34 (d) 40

8. When counting by 2, then which number comes just after 60?

- (a) 58 (b) 61 (c) 59 (d) 62

9. $\boxed{?}$ tens + $\boxed{2}$ ones = $\boxed{92}$

- (a) 8 (b) 9
(c) 1 (d) 2

10. What is the place value of 6 in the number 86?

- (a) Tens (b) Ones
(c) Hundred (d) Zero

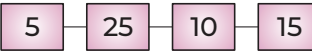
11. Which numberline shows the counting of number 3?



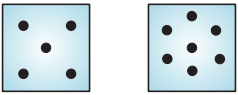
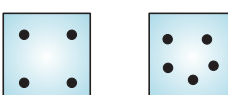
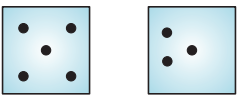
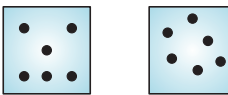
12. Which of the following is a correct match?

- (a) $\boxed{32}$ — $\boxed{\text{Thirty}}$ (b) $\boxed{13}$ — $\boxed{\text{Thirteen}}$
(c) $\boxed{46}$ — $\boxed{\text{Twelve}}$ (d) $\boxed{24}$ — $\boxed{\text{Four}}$

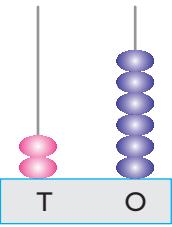
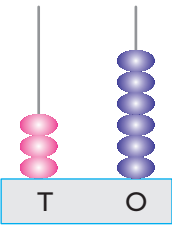
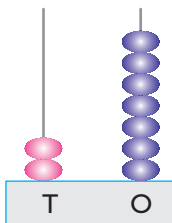
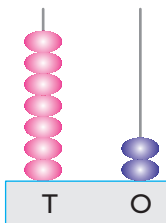
13. What is the correct ascending order of 5,25,10,15?

- (a)  (b) 
 (c)  (d) 

14. Which figure shows equal collection of dots?

- (a)  (b) 
 (c)  (d) 

15. Which abacus shows 1 more than 26?

- (a)  (b) 
 (c)  (d) 

Answers

1	(c)	2	(b)	3	(c)	4	(a)	5	(a)	6	(d)	7	(c)	8	(d)	9	(b)	10	(b)
11	(a)	12	(b)	13	(c)	14	(d)	15	(c)										