

# *Bloom Computer Olympiad Sample Paper*

Maximum Time : 60 Minutes

Maximum Marks : 35


## INSTRUCTIONS

1. There are 35 Multiple Choice Questions in this paper.
2. Each question has Four Options out of which **ONLY ONE** is correct.
3. All questions are compulsory.
4. There is no negative marking.
5. No electric device capable of storing and displaying visual information such as calculator and mobile is allowed during the course of the exam.

Roll No.

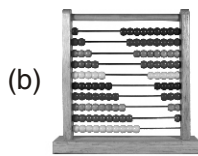

Student's Name

7. You can open this application store right from the Start screen of Windows 8.1 to browse and download apps for cooking, sports, news, etc. Identify it.



- (a) Skydrive  
(b) Skype  
(c) Windows Store  
(d) Downloadable Store

2. Which of the following is the image of Abacus?



3. The first calculating machine which had wheels and gears was

- (a) Pascaline  
(b) Calculator  
(c) Punch Card  
(d) Difference engine

4. A computer cannot take its own decisions and it works only on man's orders, which means

- (a) it has no IQ  
(b) it has no memory  
(c) it is not accurate  
(d) it is versatile

5. .... was a proposed mechanical computer designed by Charles Babbage.

- (a) Punch card    (b) Analytical Engine    (c) Pasco    (d) Difference Pascal

6. Which of the following is not a version of the Android Operating System?

- (a) Red Hat  
(b) Jelly Bean  
(c) Ice Cream Sandwich  
(d) KitKat

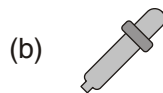
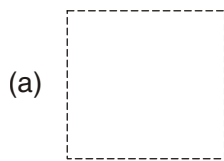
7. What do you mean by the term online?

- (a) When you are connected to the internet through an ISP or a network.  
(b) When you are standing in a queue.  
(c) When you are connected to a telephone.  
(d) None of the above

8. A computer cannot work itself. It needs instructions to work. So to work, a computer is given the set of code or instructions. What is this set of code or instruction called?

- (a) Hardware  
(b) Software  
(c) Word processor  
(d) Middleware

- 9.** Physical Components that make up your computer are known as
- (a) Hardware (b) Operating System  
(c) Software (d) Both (b) and (c)
- 10.** In which of the following editions of Windows, Cortana an intelligent personal assistant from Microsoft was not present by default?
- (a) Windows 10 (b) Windows 8.1  
(c) Windows 7 (d) None of these
- 11.** What is the function of folder?
- (a) Save-files (b) Delete file  
(c) Move files (d) All are correct
- 12.** Microsoft windows is a/an
- (a) Operating System (b) Software  
(c) Data (d) All of these
- 13.** Which of the following statement(s) is/are correct?
- (a) Add/remove program from control panel.  
(b) Delete the shortcut icon from Desktop.  
(c) Restore the file from recycle.  
(d) All are correct
- 14.** Which of the following is not essential to shut down your computer?
- (a) Save all opened files (b) Close all running applications  
(c) Switch off monitor (d) Cut off the power supply
- 15.** What do you do to select an icon?
- (a) Left Click (b) Right Click  
(c) Double Click (d) Scrolled
- 16.** If Latika wants to use the exactly the same color in her drawing that she had used previously, the best way to select that color is to use



- 17.** What is the function of given icon?

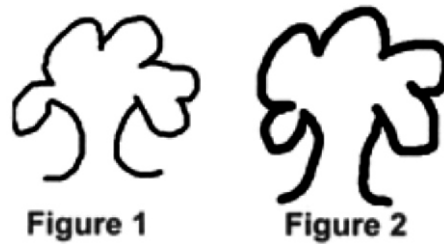


- (a) It divides the canvas in two parts. (b) It shows a larger version of an image.  
(c) It shows the frame on the picture. (d) None of these

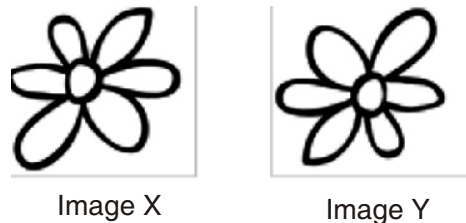
18. Which of the following is not a ready-made shape?



19. The two figures are drawn using pencil tool. Which of the following keyboard shortcuts is used to increase the width of the pencil tool in Figure2?



20. Which of the following operations would change the Image X into the Image Y?



- (a) Rotate 360°
- (b) Skew
- (c) Rotate 180°
- (d) Rotate 270°


21. Given here is an image of options available in the Clipboard group of Home tab. Which of the following tasks is not possible with the help of these options?



- (a) Removing a line of text.
- (b) Copying a line of text
- (c) Repeating the last operation
- (d) Pasting a copied part

22. Ruchi performed the following steps in a document.

I. Typed desktop



II. Pressed key



III. Pressed key

What would be displayed?

- (a) desktoy      (b) desktoY      (c) deskto      (d) deskop

23. I am seen in the MS Word application window when a document is open. I measure the width of the document, display margin settings, tab settings and indentation. Who am I?

- (a) Title bar      (b) File tab      (c) Ruler      (d) Working area

24. Which of the following keyboard shortcuts when pressed, will display the "Open" dialog box?



25. I have created a file and now I am saving it with the name Water\_Use. What would be its complete name after saving?

- (a) Water\_Use      (b) Water\_Use.docx      (c) Water\_ Use.wrd      (d) Water\_Use.wrt


26. Internet makes it possible to

- (a) share information between connected machines.  
(b) transfer money from one account to another.  
(c) transfer hard copy of books.  
(d) Both (a) and (b)

27. ISP is an acronym that refers for a company that provides

- (a) free books      (b) internet connection  
(c) list of nearby book shops      (d) shelter to needy

28. Select the odd one out with respect to search engines.



29. Consider the following statements.

**John** CPU of a computer is its hardware device, whereas, RAM is its software part.

**Mary** The Paint brush application in a computer is its software part, whereas hard disk is its hardware part.

**Peter** Hardware is a collection of code and instructions.

Who is correct?

- (a) Peter      (b) John      (c) Mary      (d) All are correct

30. www.sofworld.org is a/an ..... which is accessed with the help of a

- (a) URL, browser      (b) ISP, Search engine  
(c) Cable, ISP      (d) Browser, URL

31. Read the following statements.

- I. Hardware refers to the physical components of the computer.
- II. Human were refers to the people operating the computer.
- III. Hardware that can follow instructions by software.

Which one of the following is correct about the above statements?

- (a) Only I
- (b) Only II
- (c) Only III
- (d) All are correct

32. Smartphones have gained immense popularity in the last few years. You can do almost everything on a smartphone that you used to do on desktop PCs. Which of the following tasks cannot be performed on smartphone?

- (a) Surfing Internet
- (b) Playing games
- (c) Reading a CD
- (d) Downloading music

33. Which among the following is the name of the device that would be based on mixed reality platform “Windows Holographic”?

- (a) Microsoft HoloLens
- (b) Microsoft Hologlass
- (c) Holo Smartglass
- (d) Holo Shades

34. The image of a computing device is given below. Answer the questions that follows.



Match the parts labelled as **(P)**, **(Q)**, **(R)** and **(S)** given in Column 1 with their names given in Column 2.

Column 1	Column 2
A. <b>(P)</b>	(1) Monitor
B. <b>(Q)</b>	(2) CPU
C. <b>(R)</b>	(3) Keyboard
D. <b>(S)</b>	(4) Mouse

**Codes**

- |     |   |   |   |   |
|-----|---|---|---|---|
|     | A | B | C | D |
| (a) | 1 | 2 | 3 | 4 |
| (c) | 3 | 4 | 1 | 2 |

- |     |   |   |   |   |
|-----|---|---|---|---|
|     | A | B | C | D |
| (b) | 2 | 3 | 4 | 1 |
| (d) | 4 | 3 | 2 | 1 |

**35.** Match the following two columns.

Column I	Column II
A. Hardware	1. Optional
B. Software	2. Inseparable
C. CPU	3. Tangible
D. CD	4. Intangible

**Codes**

- |     |   |   |   |   |
|-----|---|---|---|---|
|     | A | B | C | D |
| (a) | 3 | 4 | 2 | 1 |
| (c) | 1 | 2 | 3 | 4 |

- |     |   |   |   |   |
|-----|---|---|---|---|
|     | A | B | C | D |
| (b) | 4 | 3 | 2 | 1 |
| (d) | 3 | 1 | 4 | 2 |

**OMR SHEET**

<b>1</b>	(a)	(b)	(c)	(d)	<b>2</b>	(a)	(b)	(c)	(d)	<b>3</b>	(a)	(b)	(c)	(d)	<b>4</b>	(a)	(b)	(c)	(d)
<b>5</b>	(a)	(b)	(c)	(d)	<b>6</b>	(a)	(b)	(c)	(d)	<b>7</b>	(a)	(b)	(c)	(d)	<b>8</b>	(a)	(b)	(c)	(d)
<b>9</b>	(a)	(b)	(c)	(d)	<b>10</b>	(a)	(b)	(c)	(d)	<b>11</b>	(a)	(b)	(c)	(d)	<b>12</b>	(a)	(b)	(c)	(d)
<b>13</b>	(a)	(b)	(c)	(d)	<b>14</b>	(a)	(b)	(c)	(d)	<b>15</b>	(a)	(b)	(c)	(d)	<b>16</b>	(a)	(b)	(c)	(d)
<b>17</b>	(a)	(b)	(c)	(d)	<b>18</b>	(a)	(b)	(c)	(d)	<b>19</b>	(a)	(b)	(c)	(d)	<b>20</b>	(a)	(b)	(c)	(d)
<b>21</b>	(a)	(b)	(c)	(d)	<b>22</b>	(a)	(b)	(c)	(d)	<b>23</b>	(a)	(b)	(c)	(d)	<b>24</b>	(a)	(b)	(c)	(d)
<b>25</b>	(a)	(b)	(c)	(d)	<b>26</b>	(a)	(b)	(c)	(d)	<b>27</b>	(a)	(b)	(c)	(d)	<b>28</b>	(a)	(b)	(c)	(d)
<b>29</b>	(a)	(b)	(c)	(d)	<b>30</b>	(a)	(b)	(c)	(d)	<b>31</b>	(a)	(b)	(c)	(d)	<b>32</b>	(a)	(b)	(c)	(d)
<b>33</b>	(a)	(b)	(c)	(d)	<b>34</b>	(a)	(b)	(c)	(d)	<b>35</b>	(a)	(b)	(c)	(d)					

# Answers

1. (c) Windows Store

3. (a) Pascaline

5. (b) Analytical engine

7. (a) When you are connected to the internet through an ISP or a network.

8. (b) Software

10. (c) Windows 7

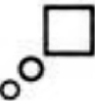
12. (a) Operating System

14. (c) Switch off monitor

16. (b)



18. (b)



20. (c) Rotate 180°

22. (c) Pressed key

24. (b)



26. (d) Both (a) and (b)

28. (d)




30. (a) URL, browser

32. (c) Reading a CD

34. (b) 2 3 4 1

2. (b)



4. (a) It has no IQ

6. (a) Red Hat

9. (d) Both (b) and (c)

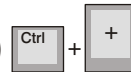
11. (d) All are correct

13. (d) All are correct

15. (a) Left click

17. (d) None of these

19. (a)



21. (c) Repeating the last operation

23. (c) Ruler

25. (b) Water\_Use.docx

27. (b) Internet connection

29. (c) Mary

31. (d) All are correct

33. (a) Microsoft HoloLens

35. (a) A-3, B-4, C-2, D-1